



هيئة تقويم التعليم والتدريب
Education & Training Evaluation Commission




Preparation Form (B)

National Tests (NAFS)

3rd Grade

2026



Section One: Mathematics

Items: 1 - 8

Time: 16 Min.

INSTRUCTIONS

- Read each question carefully, then choose the correct answer.
- Each question has only **one** correct answer.
- Answer all the questions.





1 In an elementary school, the morning assembly starts at 6:45 AM, and continues for 20 minutes with the broadcast and physical activities. What time do these activities end?



2 The picture shows the price of a painting that Layla bought. She gave the seller two 5-riyal notes. How much change will she get back?

A. 2

B. 3

C. 4

D. 5



3 Hisham and Nasser want to buy two bags. Hisham chooses the bag with the largest number printed on it, and Nasser chooses the bag with the smallest number on it. What are the two bags?



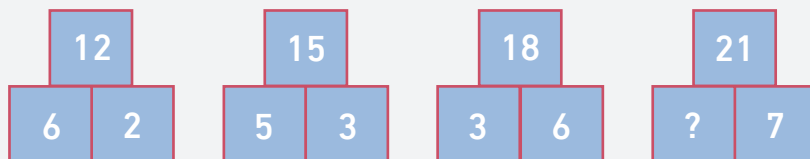
A. Blue and Green

B. Yellow and Green

C. Red and Blue

D. Yellow and Red

4 In the figure below, what number should replace the question mark?



A. 6

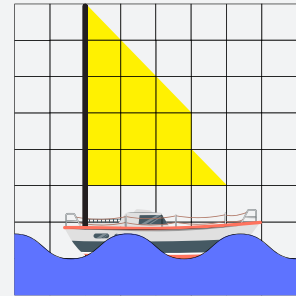
B. 5

C. 3

D. 2

- 5 Manal drew the sailboat and she colored its sail yellow as shown below. What is the area of the sail in square units?

- A. 13
B. 11
C. 9
D. 8



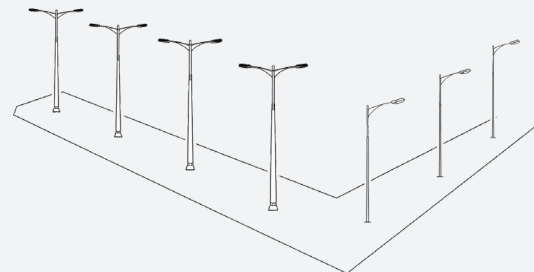
- 6 Bader and Fahad took some pictures as shown in the table below. How many more pictures did Bader take than Fahad?

- A. 12
B. 14
C. 26
D. 38

Student	Number of pictures
Bader	126
Fahad	112

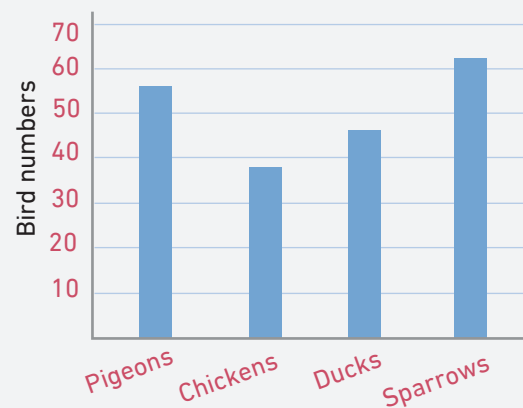
- 7 In the picture below, there are streetlight poles. Some have one lamp, and others have two lamps. Which numerical expression shows the total number of lamps?

- A. 7×2
B. $(4+3) \times 2$
C. $(3 \times 2) + (4 \times 2)$
D. $(4 \times 2) + (3 \times 1)$



- 8 According to the graph below, which bird has the smallest number?

- A. Sparrows
B. Ducks
C. Chickens
D. Pigeons





Section Two: Reading

Items: 9 - 13

Time: 16 Min.

INSTRUCTIONS

- Read the whole passage before you answer the questions.
- Read each question carefully, then choose the correct answer.
- Each question has only **one** correct answer.
- Answer all the questions.



12 What is the difference between optical and radio telescopes?

- A. Both use only lenses or mirrors.
 - B. Both were invented in the 1600s.
 - C. Optical telescopes use lenses; radio telescopes detect signals.
 - D. Radio telescopes use mirrors; optical telescopes detect signals.
-

13 Which situation is most similar to how telescopes work?

- A. taking photos with a camera.
 - B. wearing eyeglasses to read clearly.
 - C. using binoculars to see a bird far away.
 - D. using a microscope to observe tiny objects.
-

End of test

Answer Key

#	Answer Key
1	B
2	B
3	A
4	C
5	B
6	B
7	D
8	C
9	A
10	C
11	B
12	C
13	C





هيئة تقويم التعليم والتدريب

Education & Training Evaluation Commission



ETECKSA



ETEC.GOV.SA