



هيئة تقويم التعليم والتدريب  
Education & Training Evaluation Commission




Preparation Form (A)

# National Tests (NAFS)

3rd Grade

2026



## Section One: Mathematics

Items: 1 - 8

Time: 16 Min.

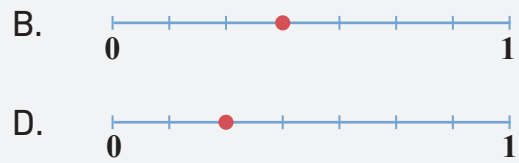
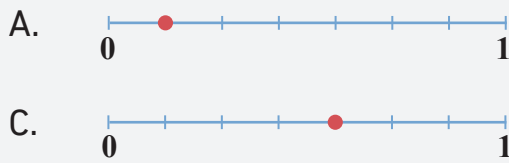
### INSTRUCTIONS

- Read each question carefully, then choose the correct answer.
- Each question has only **one** correct answer.
- Answer all the questions.

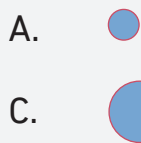





1 Which of the following number lines represents the fraction that indicates the number of open windows?



2 Which shape fills in the blank in the pattern below?



3 Khaled drew a three-dimensional shape with one vertex and no edges. Which of the following represents the shape he drew?

A. Pyramid

B. Cone

C. Cube

D. Cylinder

4 What is the missing number that makes the addition sentence true?

- A. 

1	5	5
---	---	---
- B. 

5	4	4
---	---	---
- C. 

1	4	4
---	---	---
- D. 

4	5	5
---	---	---

$$\begin{array}{r} \begin{array}{|c|c|c|} \hline 4 & 1 & 1 \\ \hline 3 & 2 & 2 \\ \hline \square & \square & \square \\ \hline \hline 8 & 8 & 8 \\ \hline \end{array} \\ + \\ \hline \end{array}$$





## Section Two: Reading

Items: 9 - 13

Time: 16 Min.

### INSTRUCTIONS

- Read the whole passage before you answer the questions.
- Read each question carefully, then choose the correct answer.
- Each question has only **one** correct answer.
- Answer all the questions.

9 “The science teacher used the right **instrument** for the experiment.”  
Which word is closest in meaning to “**instrument**” in this sentence?

- |           |           |
|-----------|-----------|
| A. device | B. idea   |
| C. case   | D. signal |

10 “The student’s backpack was **heavy**. He could barely lift it.”  
What does “**heavy**” mean in this sentence?

- |                 |                  |
|-----------------|------------------|
| A. easy to lift | B. very small    |
| C. super strong | D. hard to carry |

Linda loved her small garden and enjoyed watching her plants grow. One week, she went on vacation and forgot to water them. When she returned, the flowers looked sad and wilted, and a few leaves had turned brown. She carefully watered each plant, trimmed the dry leaves, pulled out weeds, and cleared fallen petals. She even dug small holes to help the soil breathe.



Plants need sunlight, water, and air to grow.

Each plant starts as a tiny seed. When planted in good soil and given water, the seed begins to sprout. Roots grow downward to find water, and stems grow upward toward the sunlight. Over time, seedlings get taller and develop green leaves. Air and sunlight help plants make their own food through photosynthesis.

Linda checked her garden every day and noticed tiny buds slowly peeking through the soil. After a few weeks, the flowers bloomed beautifully, and butterflies came to visit. Linda smiled, happy to see her plants alive and healthy again.



**11** Why did Linda dig small holes in the soil?

- A. to store water underground for later use.
  - B. to hide extra seeds she didn't want to plant.
  - C. to keep insects away from her flower garden.
  - D. to help the soil get air and improve plant growth.
- 

**12** Which event happened before the flowers bloomed again in Linda's garden?

- A. The plants were gently watered and the wilted leaves were trimmed.
  - B. Butterflies moved around the bright flowers in the warm sunlight.
  - C. The garden was filled with fully opened flowers of different colors.
  - D. A warm smile appeared as the healthy plants were admired happily.
- 

**13** Your friend wants to grow a healthy plant. Based on what Linda did in the story, what advice would you give him?

- A. Plant the seed in good soil, water it regularly, and make sure it gets sunlight.
  - B. Leave the seed in a dry container without soil or light, and avoid giving it water.
  - C. Place the seed in a dark closet, ignore it completely, and expect it to grow on its own.
  - D. Keep the seed on a shelf indoors without planting it or giving it what it needs to grow.
- 

**End of test**

## Answer Key

#	Answer Key
1	B
2	C
3	B
4	A
5	D
6	A
7	B
8	C
9	A
10	D
11	D
12	A
13	A





# هيئة تقويم التعليم والتدريب

Education & Training Evaluation Commission



ETECKSA



ETEC.GOV.SA